

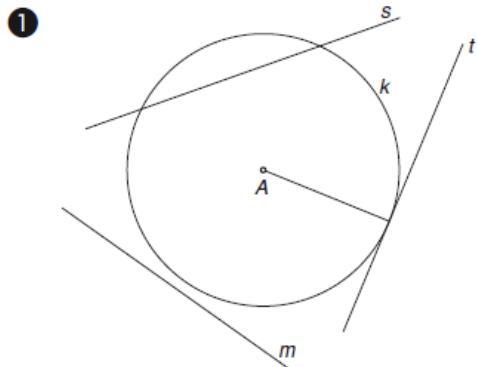
# 1. ura – 3. teden

PREMISLI:

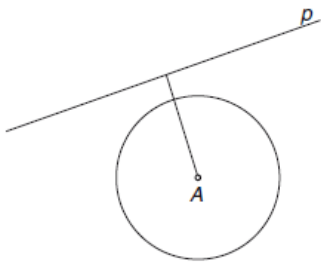
Ali veš v kakšnih legah sta lahko krožnica in premica?

Oglej si rešitve nalog 1, 2, 3 in 7, 8, 9 na strani 193.

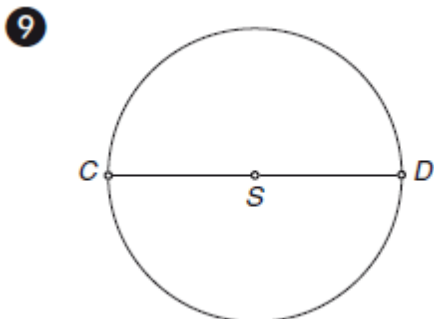
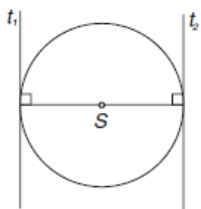
## 7.8 KROŽNICA IN PREMICA



2 premica  $p$  je mimobežnica



3 tangenti sta vzporedni



7 dve rešitvi

